

G12... Constructing Triangles

OCR

Edexcel

10 Use ruler and compasses to construct an equilateral triangle with sides of length 7 cm.
You must show all your construction lines.

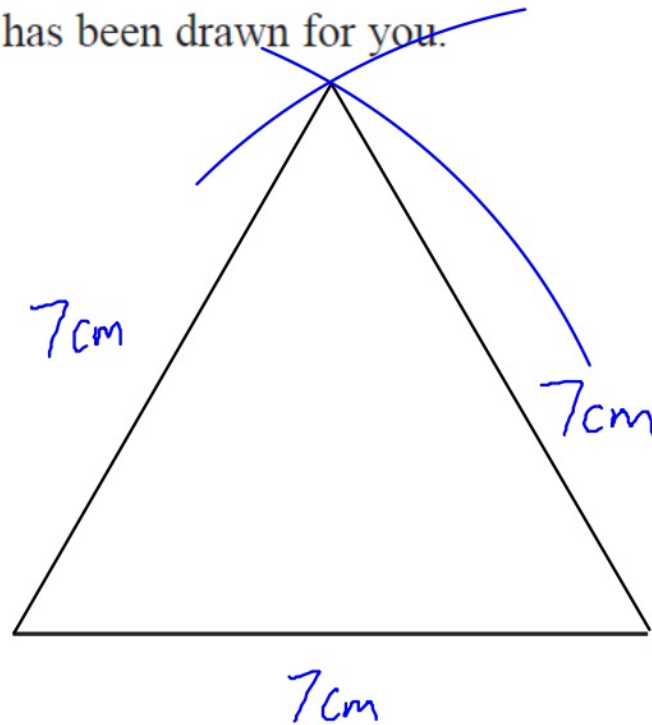
G12 One side of the triangle has been drawn for you.



(Total for Question 10 is 2 marks)

10 Use ruler and compasses to construct an equilateral triangle with sides of length 7 cm.
You must show all your construction lines.

G12 One side of the triangle has been drawn for you.



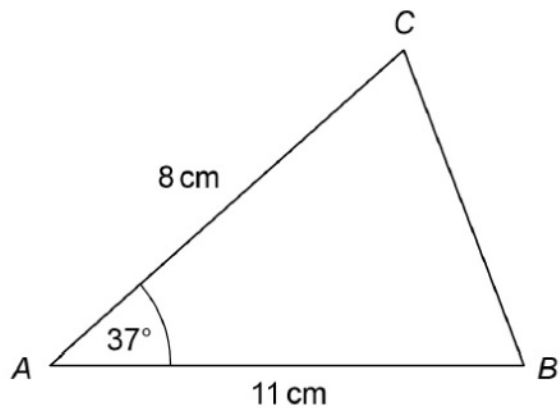
(Total for Question 10 is 2 marks)

AQA

16

A sketch of triangle ABC is shown.

G12



Not drawn
accurately

In the space below, complete an accurate drawing of triangle ABC .

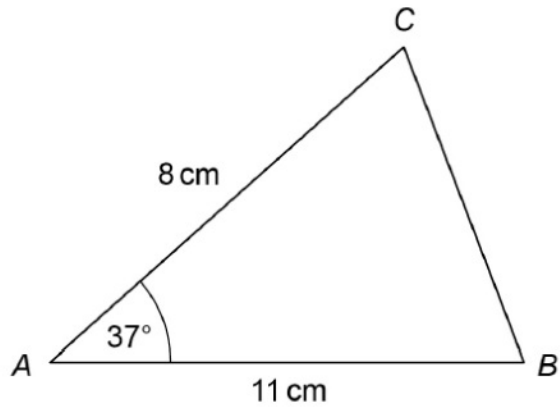
[2 marks]



16

A sketch of triangle ABC is shown.

G12



Not drawn accurately

In the space below, complete an accurate drawing of triangle ABC .

[2 marks]

